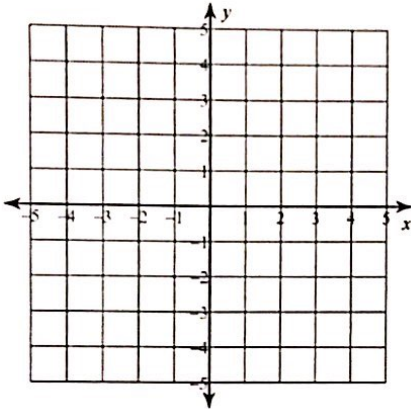


Solving Systems of Equations by Graphing

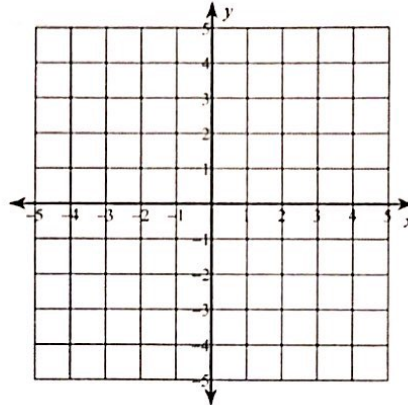
Solve each system by graphing.

1) $y = -\frac{5}{3}x + 3$

$y = \frac{1}{3}x - 3$

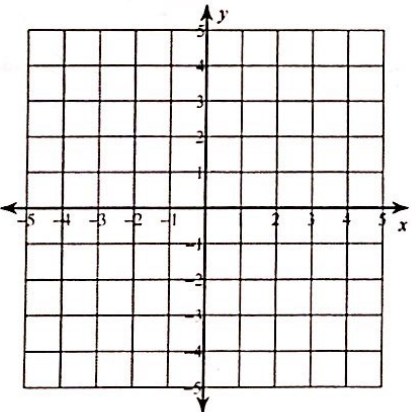


2) $y = 4x + 3$
 $y = -x - 2$



3) $y = -\frac{1}{2}x - 1$

$y = \frac{1}{4}x - 4$



4) $y = -1$
 $y = -\frac{5}{2}x + 4$

